







Addition Facts 1-10


Write a number sentence to describe each image.

 +  $\underline{\quad} + \underline{\quad} = \underline{\quad}$

 +  $\underline{\quad} + \underline{\quad} = \underline{\quad}$

 +  $\underline{\quad} + \underline{\quad} = \underline{\quad}$

 +  $\underline{\quad} + \underline{\quad} = \underline{\quad}$

 +  $\underline{\quad} + \underline{\quad} = \underline{\quad}$

 +  $\underline{\quad} + \underline{\quad} = \underline{\quad}$